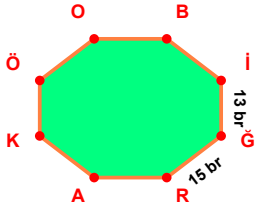
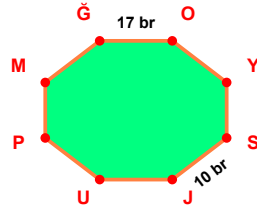


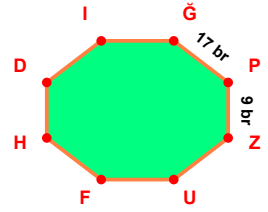
**SORU:** Aşağıdaki şekillerde verilen, kenar uzunlukları farklarını bulunuz.



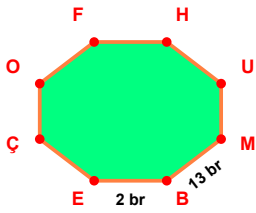
$$|GR| - |İG| = \dots\dots$$



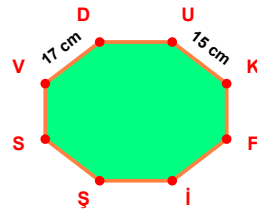
$$|ÖO| - |SJ| = \dots\dots$$



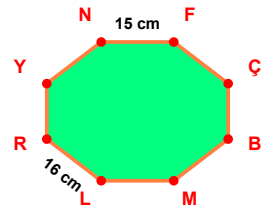
$$|İP| - |PZ| = \dots\dots$$



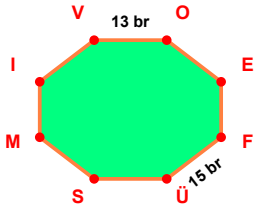
$$|MB| - |BE| = \dots\dots$$



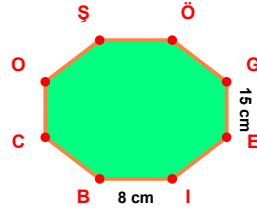
$$|VD| - |UK| = \dots\dots$$



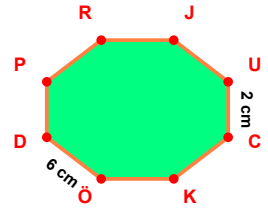
$$|LR| - |NF| = \dots\dots$$



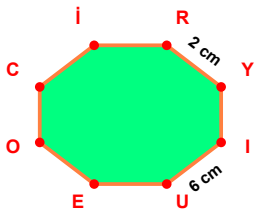
$$|FÜ| - |VO| = \dots\dots$$



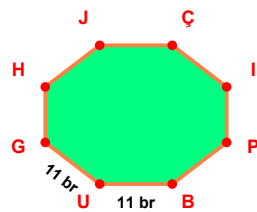
$$|GE| - |İB| = \dots\dots$$



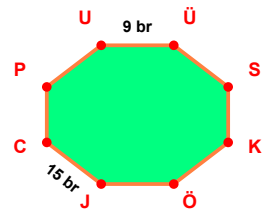
$$|ÖD| - |UC| = \dots\dots$$



$$|IU| - |RY| = \dots\dots$$

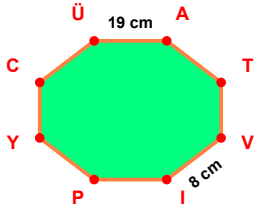


$$|UG| - |BU| = \dots\dots$$

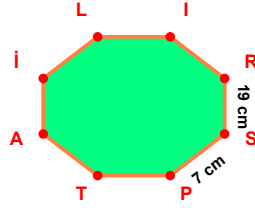


$$|JC| - |ÜÜ| = \dots\dots$$

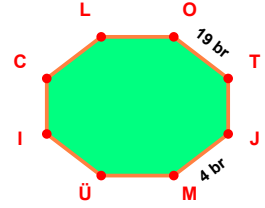
**SORU:** Aşağıdaki şekillerde verilen, kenar uzunlukları farklarını bulunuz.



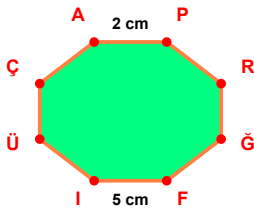
$$|ÜA| - |VI| = \dots\dots$$



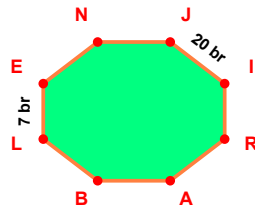
$$|RS| - |SP| = \dots\dots$$



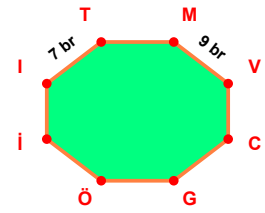
$$|OT| - |JM| = \dots\dots$$



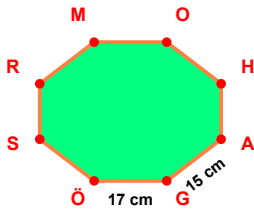
$$|FI| - |AP| = \dots\dots$$



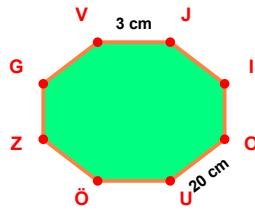
$$|JI| - |LE| = \dots\dots$$



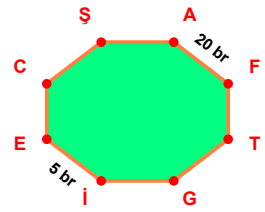
$$|MV| - |IT| = \dots\dots$$



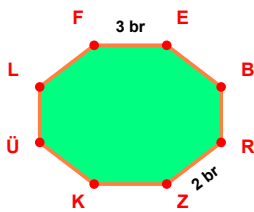
$$|GÖ| - |AG| = \dots\dots$$



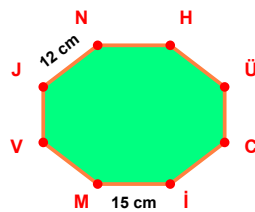
$$|OU| - |VJ| = \dots\dots$$



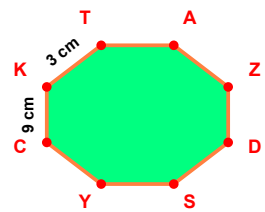
$$|AF| - |İE| = \dots\dots$$



$$|FE| - |RZ| = \dots\dots$$



$$|İM| - |JN| = \dots\dots$$



$$|CK| - |KT| = \dots\dots$$

## SÜREÇ ODAKLI DEĞERLENDİRME ÖLÇEĞİ

Doğru Sayısı: ..... / 24

Öğretmen ilgili kutucuğu işaretler.

Geliştirilmeli (0-8)

İyi (9-14)

Çok İyi (15-20)

Mükemmel (21-24)

☐
☐
☐
☐

Hazırlayan: .....

Bu bölüme sınıfınızın ilgili kazanıma yönelik genel durumuna ilişkin gözlem ve izlenimlerinizi, öğrencilerinizin bu kazanımla ilgili öğrenme eksikliklerini ve bu eksikliklerin giderilmesi amacıyla yaptığınız/yapmayı planladığınız faaliyetleri not edebilirsiniz.

No	Adı - Soyadı	Toplam Puan	Değerlendirme
1			
2			
3			
4			
5			
6			
7			
8			
9			
10			
11			
12			
13			
14			
15			
16			
17			
18			
19			
20			
21			
22			
23			
24			
25			
26			
27			
28			
29			
30			
31			
32			
33			
34			
35			

Hazırlayan: .....